





♀ Neaun Skorotřicátník

$+1 \times 3 + 1 \times 4$ | | | | | **2.**  | | $0 \times 1 + 2 \times 2$

$+1 \times 3 - 1 \times 4$ | **Au**  | | $1 \times 1 + 1 \times 2$


$+1 \times 3 + 0 \times 4$ | | | | |  | |


$:3 - 1 \times 4$ | *****  | | $0 \times 1 + 1 \times 2$


$+1 \times 3 + 0 \times 4$ | | | | | **1.**  | | $1 \times 1 + 1 \times 2$


$+1 \times 3 + 2 \times 4$ | *****  | | $2 \times 1 + 1 \times 2$

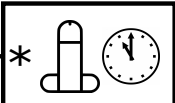
$+1 \times 3 + 0 \times 4$ | **1. !**  | | $5 \times 1 + 3 \times 2$

| | | | |  | | $2 \times 1 + 0 \times 2$

$+1 \times 3 + 0 \times 4$ | **7**  | | $1 \times 1 + 1 \times 2$

$+0 \times 3 + 2 \times 4$ | **1.**  | | | | | $2 \times 1 + 1 \times 2$

$+1 \times 3 + 1 \times 4$ | | | | |  | | $2 \times 1 + 3 \times 2$

$+1 \times 3 + 2 \times 4$ | *****  | | $1 \times 1 + 0 \times 2$

Upřesnitko: Naproti malému zadnímu vchodu na jižní straně objektu vyhledej řadu tří objektů. Hledej v křoví u jednoho z nich.